



**ST. MARGARET SR. SEC. SCHOOL**  
**SAMPLE PAPER 2024-25**  
**MATHEMATICS**  
**CLASS III**

**Time: 1.5 Hrs**

**M.M: 40**

**Q1 to Q10 carry 1 mark each**

Circle the correct answers.

1x10 = 10

1. \_\_\_\_\_ + 1321 = 4530 + 1321

4530          5851          5965          1321

2. The number to be subtracted is called \_\_\_\_\_

minuend          difference          subtrahend          None of these

3.  $4358 + 132 = 132 +$  \_\_\_\_\_

132          1770          4358          0

4.  $165 \times 1 =$  \_\_\_\_\_

1          0          165          All

5. Puneet has 25 toffees and Ram has 30 toffees. How many toffees do they have collectively?

35          5          65          55

6. The shortest month of the year is \_\_\_\_\_ .

May          February          June          October

7. The number to be multiplied is called \_\_\_\_\_ .

Product          Multiplicand          Multiplier          Addition

8.  $534 \times 10 =$  \_\_\_\_\_

53400          530          5340          None

9.  $3574 - 0 = \underline{\hspace{2cm}}$

0            3574            3560            None

10. The            of the clock is called Dial.

Face            Dial            Minute hand            Hour hand

**Q11 to Q16 carry 2 marks each**

**2x6 = 12**

11. Write in columns and add -  
 $5064 + 1897$

Th    H    T    O

\_\_\_\_\_

\_\_\_\_\_

Ans =

12. Subtract 6879 from 9160

Th    H    T    O

\_\_\_\_\_

\_\_\_\_\_

Ans =

13. Find the difference

Th	H	T	O
3	8	5	7
- 2	6	1	5

\_\_\_\_\_

\_\_\_\_\_

Th	H	T	O
7	4	6	0
- 4	3	2	0

\_\_\_\_\_

\_\_\_\_\_


14. Multiply 232 by 15

H T O

---

\_\_\_\_\_ Ans =

15. Read the time and write in 2 ways.

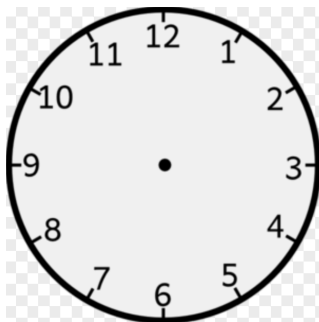


---

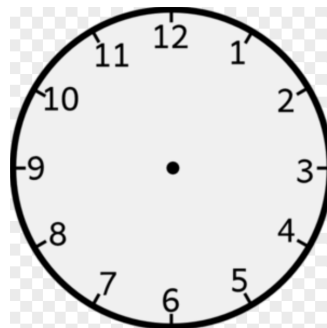
---

16. Show the time.

a. 7'o clock



b. 3:45 pm



17. Write the time using AM and PM

- a. 7:30 in the evening is \_\_\_\_\_.
- b. Quarter past 9 in the morning is \_\_\_\_\_.
- c. 9 o'clock at night is \_\_\_\_\_.

18. Check the calculations. Put a tick (✓) for the correct answer and a cross (x) for incorrect answer.

$$\begin{array}{r} \text{H T O} \\ 4 \ 3 \ 7 \\ + 1 \ 8 \ 9 \\ \hline 6 \ 2 \ 6 \end{array}$$

$$\begin{array}{r} \text{Th H T O} \\ 3 \ 9 \ 4 \ 2 \\ - 1 \ 8 \ 0 \ 1 \\ \hline 4 \ 1 \ 3 \ 2 \end{array}$$

$$\begin{array}{r} \text{H T O} \\ 3 \ 2 \ 7 \\ - 2 \ 5 \ 1 \\ \hline 0 \ 7 \ 6 \end{array}$$

19. Fill in the blanks.

- a. \_\_\_\_\_ hours make a day.
- b. India celebrates Republic Day in \_\_\_\_\_ month.
- c. \_\_\_\_\_ comes between Tuesday and Thursday.

20. Problem sum

- a. There are 146 toys in a box. How many toys are there in 7 boxes?

b. Multiply

i.  $34 \times 100 =$  \_\_\_\_\_

ii.  $150 \times 0 =$  \_\_\_\_\_

iii.  $9 \times 6 =$  \_\_\_\_\_

21. There are 657 cows and 188 buffalos in the village. How many animals are there in the village in total?

22. There are 4305 students in the school. The number of boys is 2815. How many girls are there in the school?